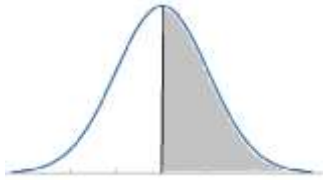


# Solutions

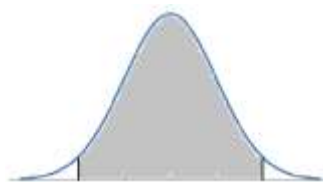
For each of the following normal curves choose the most likely probability that is represented by the shaded area of the curve



☐ 25%

☒ 50%

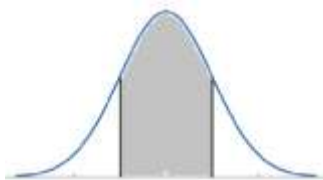
☐ 75%



☐ 68%

☒ 95%

☐ 99.8%



☒ 68%

☐ 95%

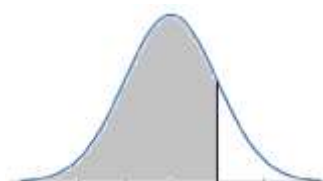
☐ 99.8%



☒ 2.5%

☐ 5%

☐ 7.5%



☐ 50%

☐ 68%

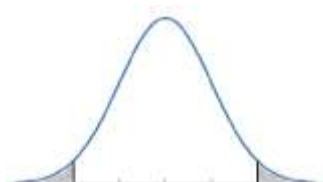
☒ 84%



☐ 95%

☒ 97.5%

☐ 99.8%



☒ 5%

☐ 68%

☐ 95%